



Coordinate Pictures

Plot these co-ordinates to make a star picture:

Line 1: (12,13), (18,20)

Line 2: (10,16), (11,12), (16,12), (12,9), (14,4), (10,7), (6,4), (8,9), (4,12), (9,12), (10,16)

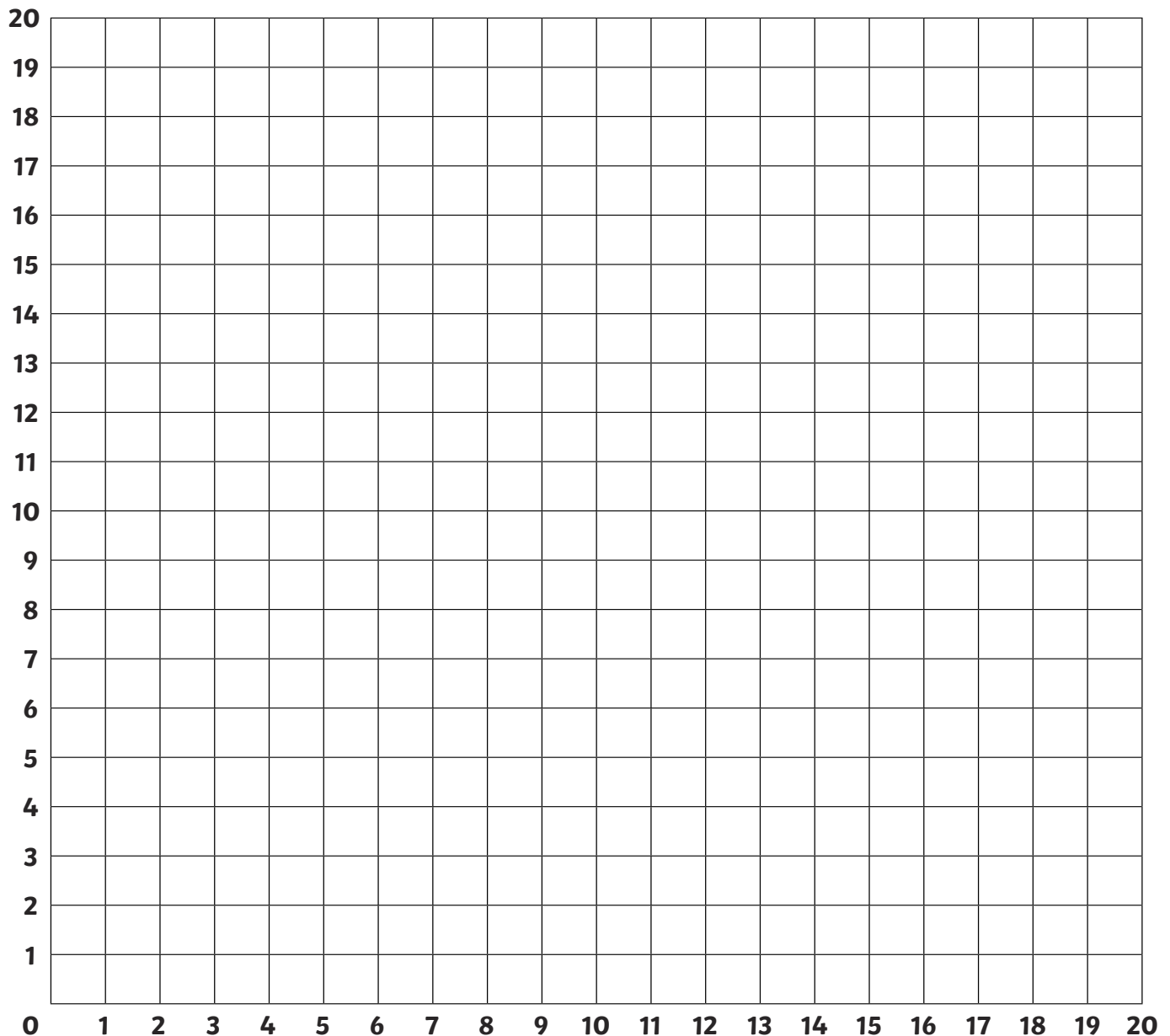
Line 3: (14,8), (20,7)

Line 4: (8,13), (2,20)

Line 5: (10,0), (10,5)

Line 6: (10,20), (12,13), (20,13), (14,8), (17,0), (10,5), (3,0), (6,8), (0,13), (8,13), (10,20)

Line 7: (6,8), (0,7)





Coordinate Pictures

Plot these co-ordinates to make a picture of a windmill:

Line 1: (8,13), (7,12), (7,10)

Line 2: (11,10), (11,8), (10,7), (15,2), (17,4), (3,18), (5,20), (10,15), (9,14), (9,12)

Line 3: (13,12), (13,8)

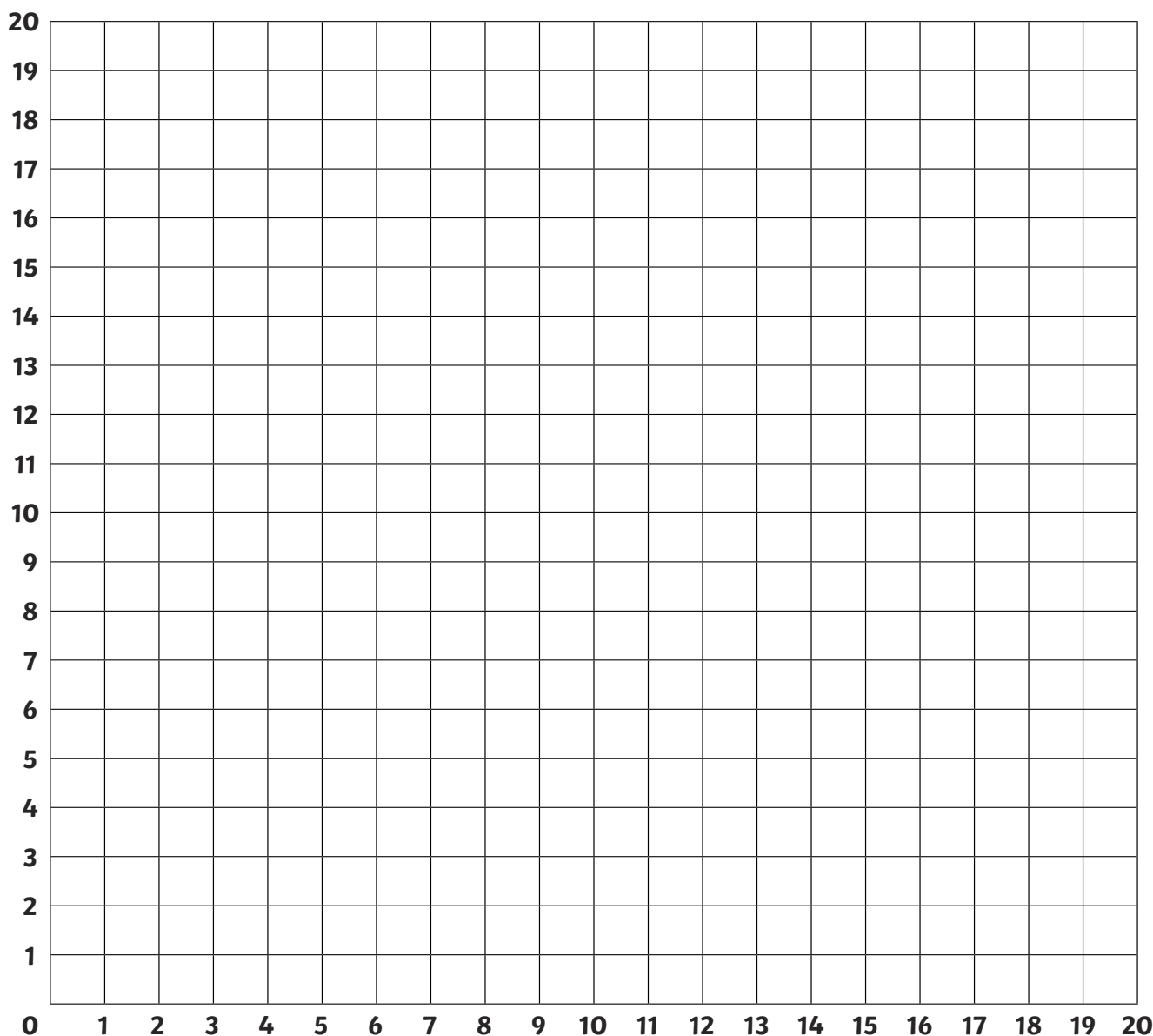
Line 4: (9,14), (11,14), (12,13)

Line 5: (13,4), (13,0), (7,0), (7,8)

Line 6: (8,7), (8,5), (9,5), (9,7), (8,7)

Line 7: (11,12), (13,12), (14,11), (19,16), (17,18), (3,4), (1,6), (6,11), (7,10), (9,10)

Line 8: (11,4), (12,4), (12,2), (11,2), (11,4)





Coordinate Pictures

Plot these co-ordinates to make a picture of a tractor:

Line 1: (15,10), (15,14), (16,15), (16,10)

Line 2: (7,12), (9,14)

Line 3: (4,7), (3,6), (3,5), (4,4), (5,4), (6,5), (6,6), (5,7), (4,7)

Line 4: (15,4), (15,3), (16,2), (17,2), (18,3), (18,4), (17,5), (16,5), (15,4),

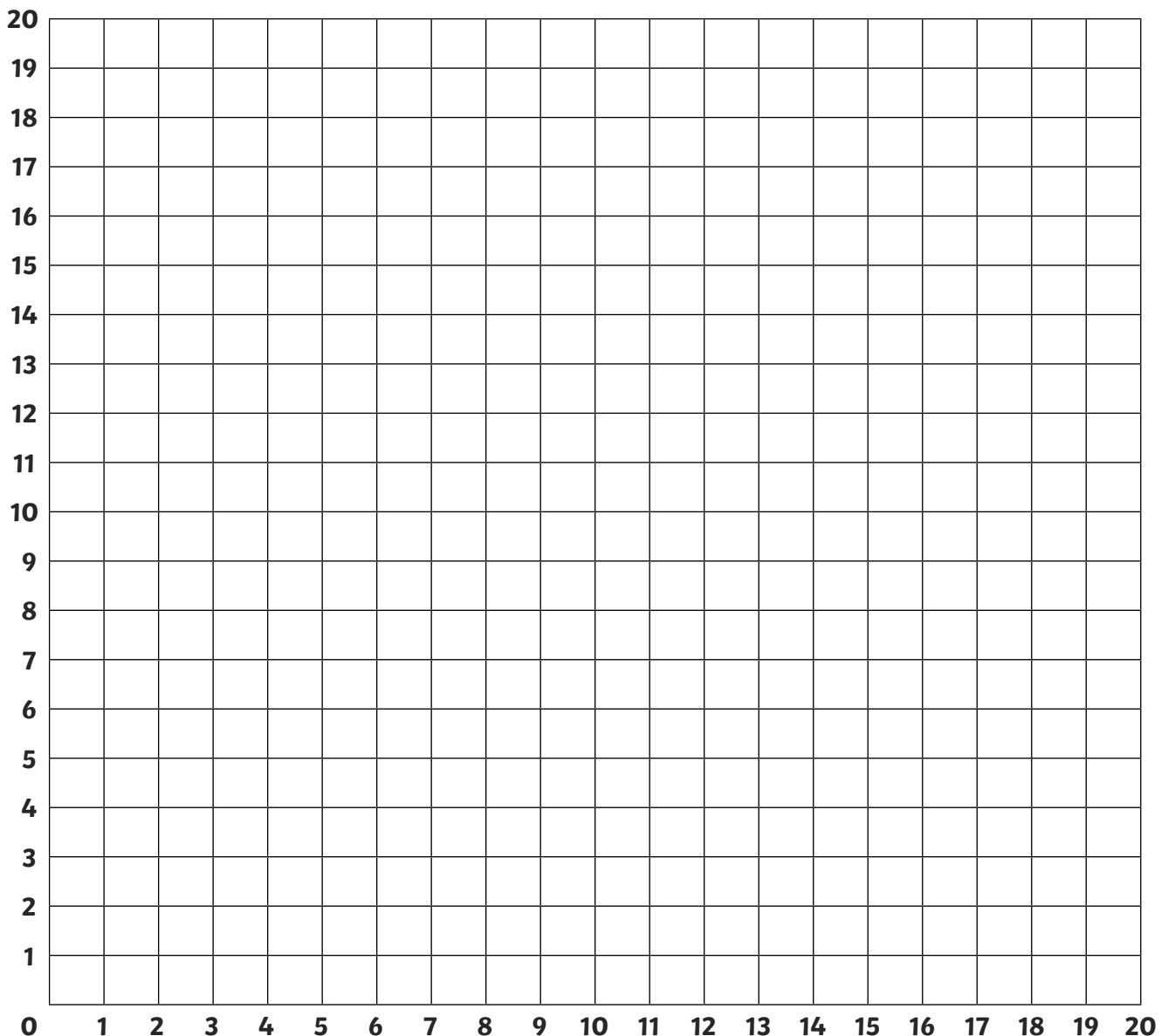
Line 5: (8,4), (8,7), (6,9), (3,9), (1,7), (1,4), (3,2), (6,2), (8,4)

Line 6: (11,10), (8,13)

Line 7: (1,17), (12,17), (10,18), (1,18), (1,10), (0,9), (0,8), (2,10), (7,10), (9,8), (9,6), (12,6),
(13,10), (10,17)

Line 8: (18,4), (20,5), (20,10), (16,10), (16,8), (17,8), (17,7), (15,7), (15,10), (7,10), (6,11), (3,11),
(3,15), (2,15), (2,8)

Line 9: (8,4) (15,4)



Coordinate Pictures Answers

