





# Flower Tally and Pictogram

Look at the flowers in the garden. Use this sheet to complete your worksheets.

Key:			
Rose	Poppy	Buttercup	Sunflower
			



# Flower Tally and Pictogram

Flowers				
	Roses	Sunflowers	Buttercups	Poppies
Tally				
Total				

Number Of Flowers				
	Roses	Sunflowers	Buttercups	Poppies

Use the graph to show how many of each flower.

**Key:**



**2 flowers**



**1 flower**

# Flower Tally and Graph

Use your pictogram to answer these questions.

1. How many roses are there? \_\_\_\_\_

2. How many sunflowers are there? \_\_\_\_\_

3. How many buttercups are there? \_\_\_\_\_

4. How many poppies are there? \_\_\_\_\_

5. How many more buttercups than roses? \_\_\_\_\_

6. How many less sunflowers than poppies? \_\_\_\_\_

7. How many flowers altogether? \_\_\_\_\_

8. Can you think of any more interesting questions that can be asked about your pictogram?

---

---

---

---