

Summer term:

Week 8:

Day 2:

■ A.  $17 \times 8 = ?$

▲ B.  $\frac{3}{5}$  of  $40 = ?$

▲ C.  $8 \times 0 = ?$

■ D.  $? \times 3 = 93$

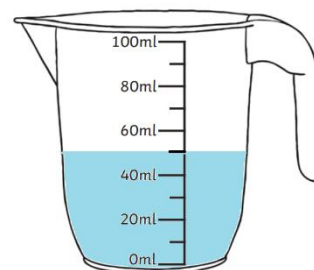
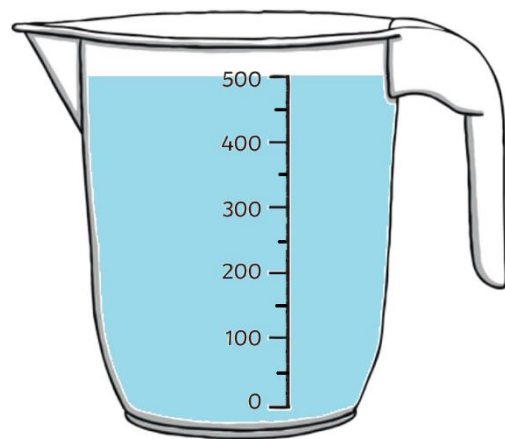
■ E.  $289 - 193 = ?$

Task 1:

What is the capacity of the container?



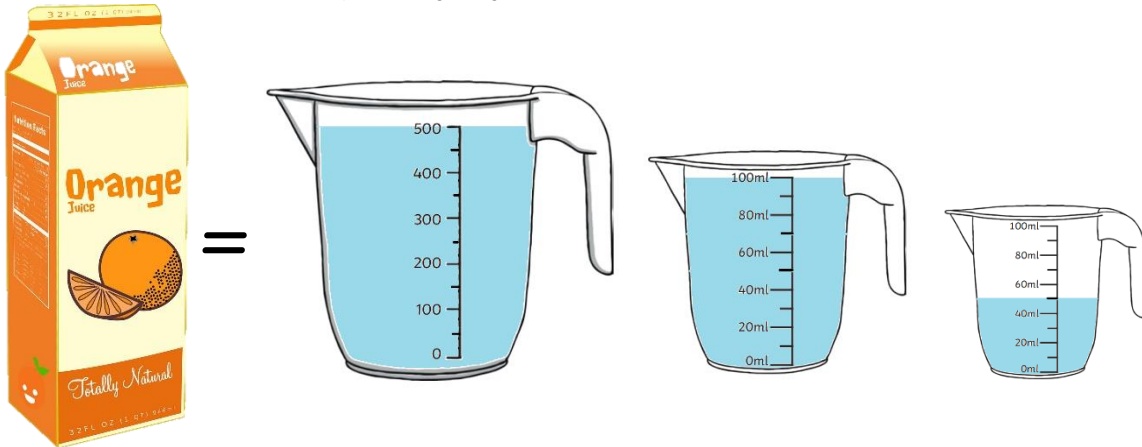
=



The capacity of the milk carton is  ml.

Task 2:

What is the capacity of the container?



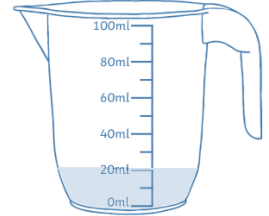
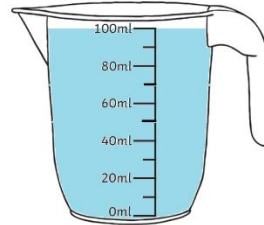
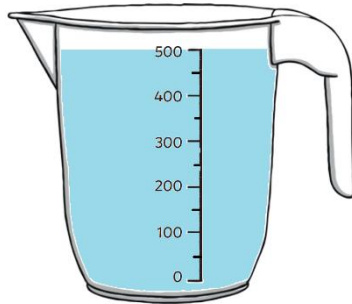
Task 3:

What size container would you need to hold both the carton of milk and orange? You need to show your workings out.

Task 4:



=

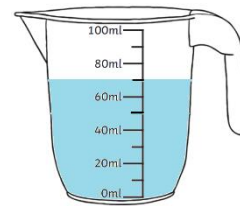
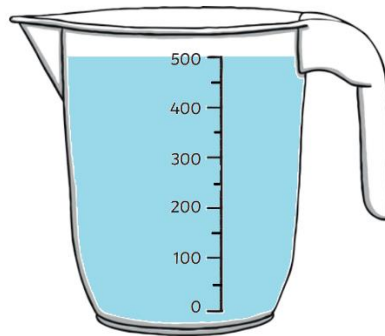


Flask A

---



=



Flask B

1) Flash  has a greater amount of water in it.

2) Flash  has a smaller amount of water.

3) The capacity of flask A is  ml  (more or less) than Flask B.