




Summer term:


Week 8:


Day 3:

 A. $\frac{1}{7} + \frac{1}{7} = ?$

 B. $4 \times 6 = ?$

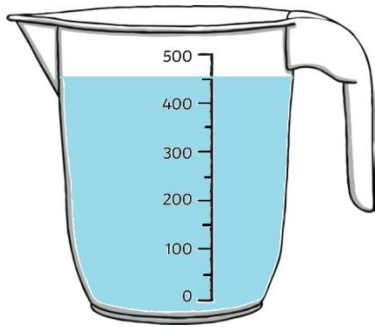
 C. $702 + 283 = ?$

 D. $34 \times 8 = ?$

 E. $9 \times 3 = ?$

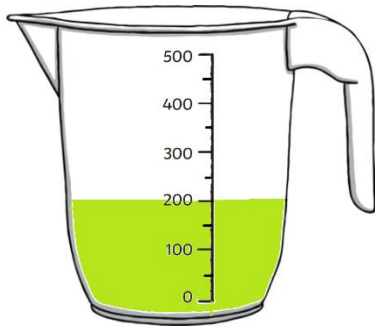
Task 1:

How much more water is needed to make 500ml?



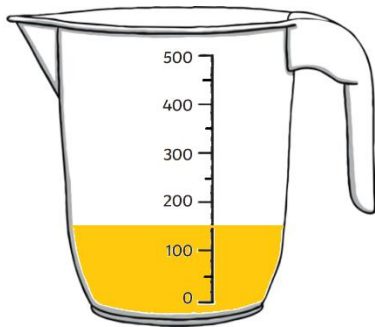
ml

How much more water is needed to make 500ml?



ml

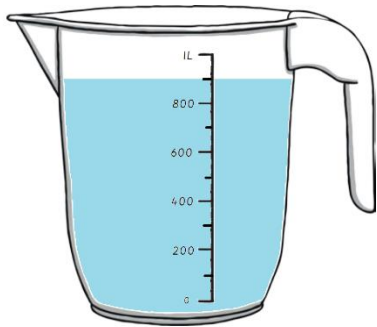
How much more water is needed to make 500ml?



ml

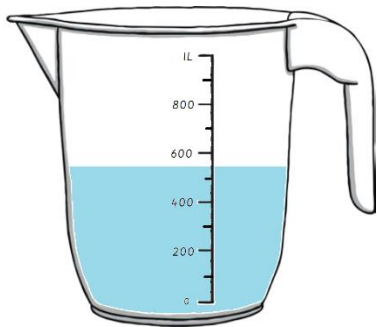
Task 2:

How much more water is needed to make 1l?



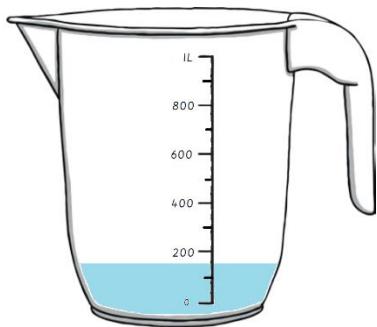
ml

How much more water is needed to make 1l?



ml

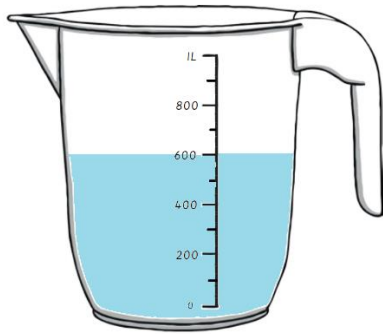
How much more water is needed to make 1l?



ml

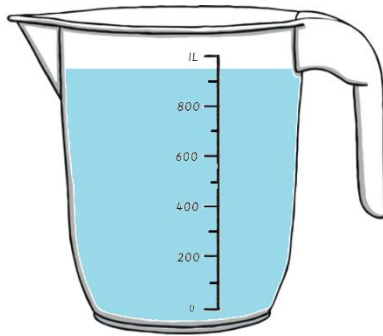
Task 3:

How much water remains in the jug in after 400ml of water is poured away?



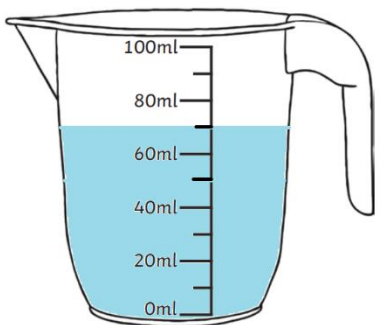
ml

How much water remains in the jug in after 500ml of water is poured away?



ml

How much water remains in the jug in after 4ml of water is poured away?



ml