




Summer term:


Week 8:


Day 4:

 A. $979 + 2 = ?$

 B. $74 \div 4 = ?$

 C. $\frac{6}{8} - \frac{5}{8} = ?$

 D. $8 \times 3 = ?$

 E. $754 - 198 = ?$

Task 1:

The vase holds 230ml less than the bucket.
Find the volume of the vase.



The bucket holds 225ml less than the dustbin.
Find the volume of water in the dustbin.



=

ml

