

Summer term:

Week 8:

Day 5:



$$A. 34 \times 4 = ?$$



$$B. 7 \times 8 = ?$$



$$C. 87 \div 3 = ?$$



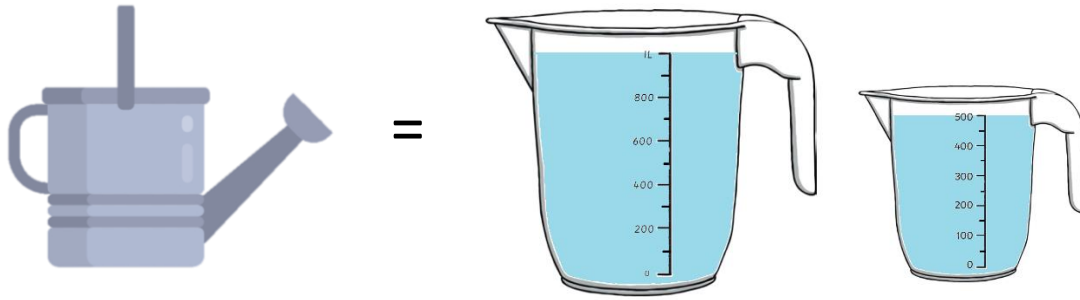
$$D. \frac{1}{4} + \frac{1}{4} = ?$$



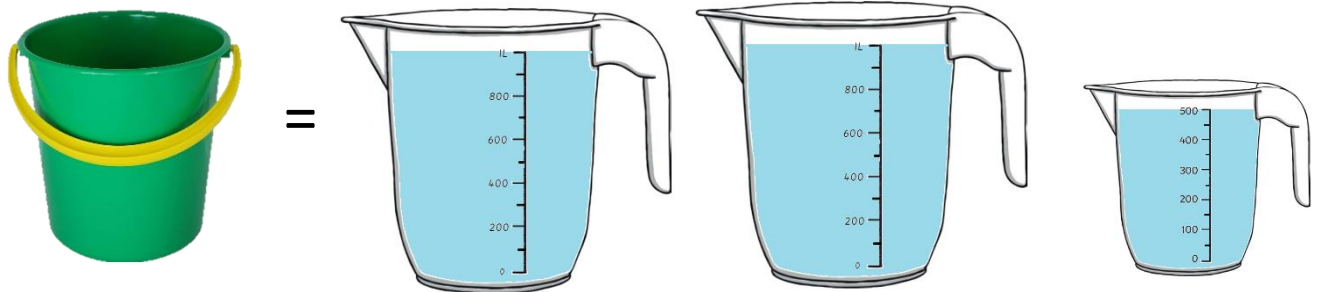
$$E. 8 \div ? = 1$$

Task 1:

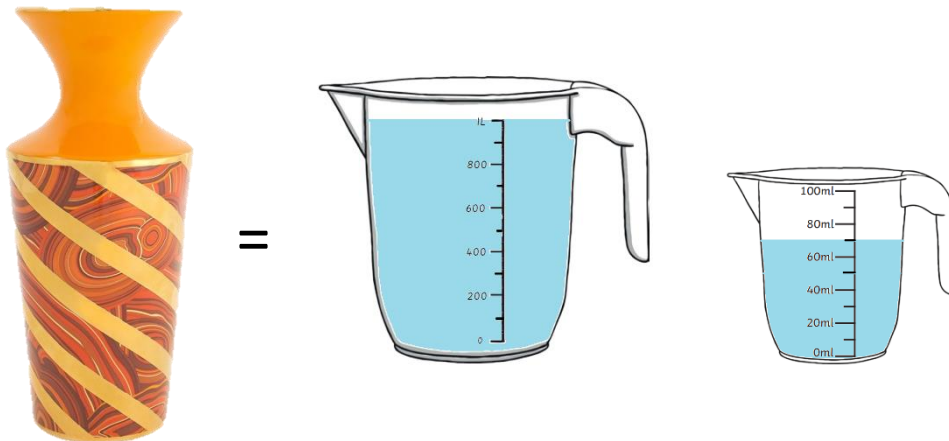
How much does each container hold?



The watering can holds l ml of water.



The bucket holds l ml of water.



The vase holds l ml of water.

Task 2:

Louise had a paddling pool with 1l 320ml of water in it. It was not enough to fill the pool.

She needed to add 5l 500ml to fill the pool.

How much water was needed to fill the pool?



1 litre 320 millilitres

+



5 litres 500 millilitres

Task 3:

Three vases hold 1 litre 833 millilitres.

How much does one vase hold?

